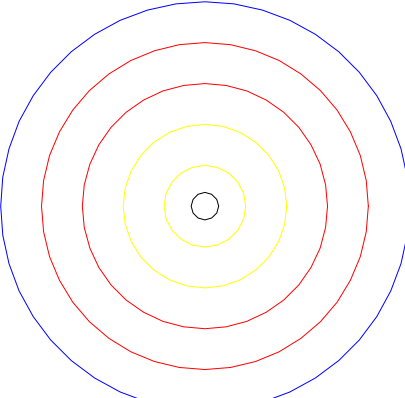
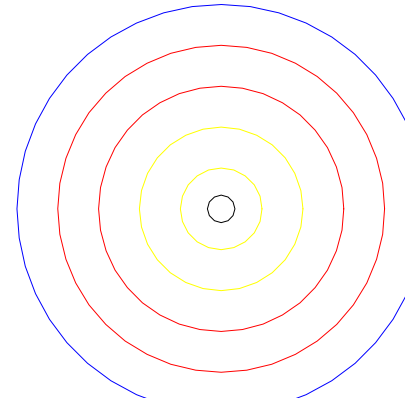
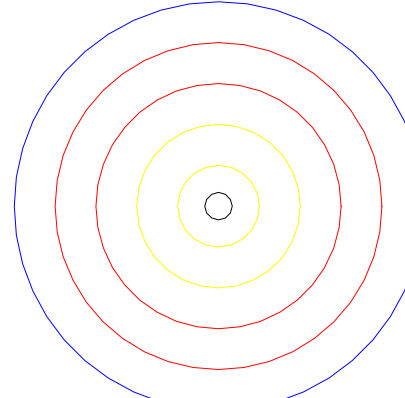
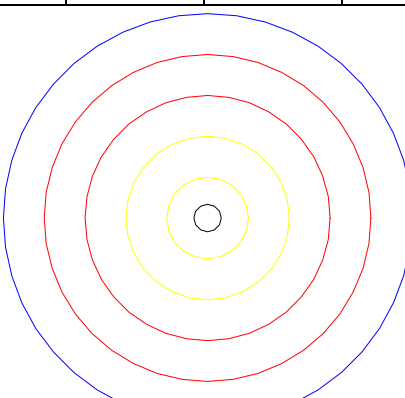
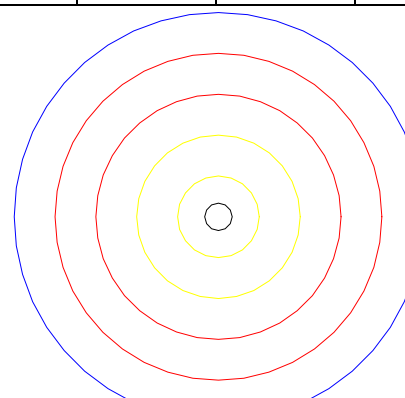
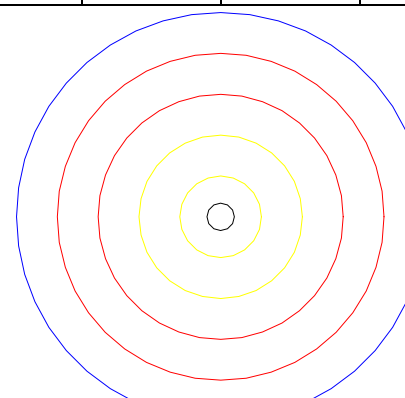


<p>Pfeil-Nr: _____</p> <table border="1" style="width: 100%; height: 50px; border-collapse: collapse;"> <tr><td style="width: 25%;"></td><td style="width: 25%;"></td><td style="width: 25%;"></td><td style="width: 25%;"></td></tr> <tr><td></td><td></td><td></td><td></td></tr> <tr><td></td><td></td><td></td><td></td></tr> <tr><td></td><td></td><td></td><td></td></tr> <tr><td></td><td></td><td></td><td></td></tr> </table> <div style="text-align: center; margin-top: 20px;">  </div>																					<p>Pfeil-Nr: _____</p> <table border="1" style="width: 100%; height: 50px; border-collapse: collapse;"> <tr><td style="width: 25%;"></td><td style="width: 25%;"></td><td style="width: 25%;"></td><td style="width: 25%;"></td></tr> <tr><td></td><td></td><td></td><td></td></tr> <tr><td></td><td></td><td></td><td></td></tr> <tr><td></td><td></td><td></td><td></td></tr> <tr><td></td><td></td><td></td><td></td></tr> </table> <div style="text-align: center; margin-top: 20px;">  </div>																					<p>Pfeil-Nr: _____</p> <table border="1" style="width: 100%; height: 50px; border-collapse: collapse;"> <tr><td style="width: 25%;"></td><td style="width: 25%;"></td><td style="width: 25%;"></td><td style="width: 25%;"></td></tr> <tr><td></td><td></td><td></td><td></td></tr> <tr><td></td><td></td><td></td><td></td></tr> <tr><td></td><td></td><td></td><td></td></tr> <tr><td></td><td></td><td></td><td></td></tr> </table> <div style="text-align: center; margin-top: 20px;">  </div>																					<p>Durchgang 1 Entfernung:</p> <table border="1" style="width: 100%; height: 80px; border-collapse: collapse;"> <tr><td style="width: 100%;"></td></tr> <tr><td></td></tr> <tr><td></td></tr> <tr><td></td></tr> <tr><td></td></tr> </table> <p>Durchgang 2 Entfernung:</p> <table border="1" style="width: 100%; height: 80px; border-collapse: collapse;"> <tr><td style="width: 100%;"></td></tr> <tr><td></td></tr> <tr><td></td></tr> <tr><td></td></tr> <tr><td></td></tr> </table> <p>Durchgang 3 Entfernung:</p> <table border="1" style="width: 100%; height: 80px; border-collapse: collapse;"> <tr><td style="width: 100%;"></td></tr> <tr><td></td></tr> <tr><td></td></tr> <tr><td></td></tr> <tr><td></td></tr> </table>															
<p>Pfeil-Nr: _____</p> <table border="1" style="width: 100%; height: 50px; border-collapse: collapse;"> <tr><td style="width: 25%;"></td><td style="width: 25%;"></td><td style="width: 25%;"></td><td style="width: 25%;"></td></tr> <tr><td></td><td></td><td></td><td></td></tr> <tr><td></td><td></td><td></td><td></td></tr> <tr><td></td><td></td><td></td><td></td></tr> <tr><td></td><td></td><td></td><td></td></tr> </table> <div style="text-align: center; margin-top: 20px;">  </div>																					<p>Pfeil-Nr: _____</p> <table border="1" style="width: 100%; height: 50px; border-collapse: collapse;"> <tr><td style="width: 25%;"></td><td style="width: 25%;"></td><td style="width: 25%;"></td><td style="width: 25%;"></td></tr> <tr><td></td><td></td><td></td><td></td></tr> <tr><td></td><td></td><td></td><td></td></tr> <tr><td></td><td></td><td></td><td></td></tr> <tr><td></td><td></td><td></td><td></td></tr> </table> <div style="text-align: center; margin-top: 20px;">  </div>																					<p>Pfeil-Nr: _____</p> <table border="1" style="width: 100%; height: 50px; border-collapse: collapse;"> <tr><td style="width: 25%;"></td><td style="width: 25%;"></td><td style="width: 25%;"></td><td style="width: 25%;"></td></tr> <tr><td></td><td></td><td></td><td></td></tr> <tr><td></td><td></td><td></td><td></td></tr> <tr><td></td><td></td><td></td><td></td></tr> <tr><td></td><td></td><td></td><td></td></tr> </table> <div style="text-align: center; margin-top: 20px;">  </div>																																				